

---

# Note Identification and Writing

Name: \_\_\_\_\_

## PART 1

Identify the following notes by letter name only (A, B, C, etc.)

①    ②    ③    ④    ⑤    ⑥    ⑦    ⑧    ⑨    ⑩

A musical staff with a treble clef. It contains ten notes, each in a separate measure. The notes are: 1. G4 (first space), 2. F4 (first space), 3. E4 (first space), 4. D4 (first space), 5. C4 (first space), 6. B3 (first space), 7. A3 (first space), 8. G3 (first space), 9. F3 (first space), 10. E3 (first space).

\_\_\_\_\_

⑪    ⑫    ⑬    ⑭    ⑮    ⑯    ⑰    ⑱    ⑲    ⑳

A musical staff with a bass clef. It contains ten notes, each in a separate measure. The notes are: 11. D3 (first space), 12. C3 (first space), 13. B2 (first space), 14. A2 (first space), 15. G2 (first space), 16. F2 (first space), 17. E2 (first space), 18. D2 (first space), 19. C2 (first space), 20. B1 (first space).

\_\_\_\_\_

㉑    ㉒    ㉓    ㉔    ㉕    ㉖    ㉗    ㉘    ㉙    ㉚

A musical staff with a bass clef. It contains ten notes, each in a separate measure. The notes are: 21. A2 (first space), 22. G2 (first space), 23. F2 (first space), 24. E2 (first space), 25. D2 (first space), 26. C2 (first space), 27. B1 (first space), 28. A1 (first space), 29. G1 (first space), 30. F1 (first space).

\_\_\_\_\_

㉛    ㉜    ㉝    ㉞    ㉟    ㊱    ㊲    ㊳    ㊴    ㊵

A musical staff with a bass clef. It contains ten notes, each in a separate measure. The notes are: 31. E2 (first space), 32. D2 (first space), 33. C2 (first space), 34. B1 (first space), 35. A1 (first space), 36. G1 (first space), 37. F1 (first space), 38. E1 (first space), 39. D1 (first space), 40. C1 (first space).

\_\_\_\_\_

## Note Identification and Writing

### PART 2

Identify the following notes by letter name only (A, B, C, etc.)

41 42 43 44 45 46 47 48 49 50

— — — — — — — — — —

Detailed description: A musical staff with a treble clef. Ten notes are placed on the staff, each with a circled number above it. The notes are: 41 (G4), 42 (B4), 43 (C5), 44 (D5), 45 (E5), 46 (F5), 47 (G5), 48 (A5), 49 (B5), and 50 (C6). Each note is a half note with a stem and a flag.

51 52 53 54 55 56 57 58 59 60

— — — — — — — — — —

Detailed description: A musical staff with a bass clef. Ten notes are placed on the staff, each with a circled number above it. The notes are: 51 (G3), 52 (B3), 53 (C4), 54 (D4), 55 (E4), 56 (F4), 57 (G4), 58 (A4), 59 (B4), and 60 (C5). Each note is a half note with a stem and a flag.

61 62 63 64 65 66 67 68 69 70

— — — — — — — — — —

Detailed description: A musical staff with an alto clef (C-clef on the third line). Ten notes are placed on the staff, each with a circled number above it. The notes are: 61 (C4), 62 (D4), 63 (E4), 64 (F4), 65 (G4), 66 (A4), 67 (B4), 68 (C5), 69 (D5), and 70 (E5). Each note is a half note with a stem and a flag.

71 72 73 74 75 76 77 78 79 80

— — — — — — — — — —

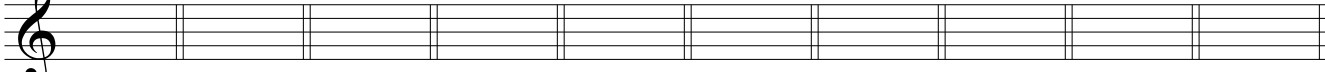
Detailed description: A musical staff with a bass clef. Ten notes are placed on the staff, each with a circled number above it. The notes are: 71 (G3), 72 (B3), 73 (C4), 74 (D4), 75 (E4), 76 (F4), 77 (G4), 78 (A4), 79 (B4), and 80 (C5). Each note is a half note with a stem and a flag.

## Note Identification and Writing

### PART 3


Write the requested notes, using any octave.

81 82 83 84 85 86 87 88 89 90



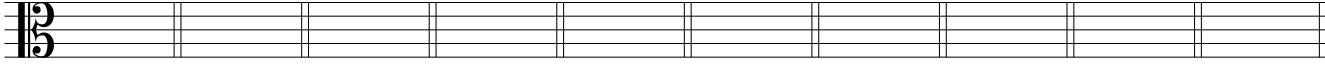
C E F A D B G C F A

91 92 93 94 95 96 97 98 99 100



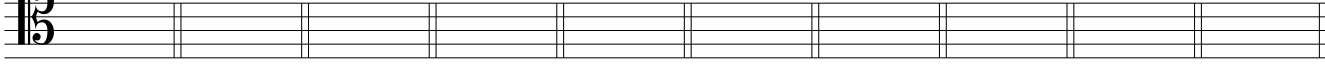
F E D B C A F G E D

101 102 103 104 105 106 107 108 109 110



B D E G D A G F C A

111 112 113 114 115 116 117 118 119 120



D C A B D F B C G E