

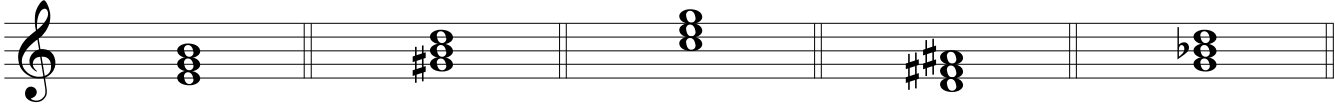
Lead Sheet Symbols

Name: _____


PART 1

Write the lead sheet symbol for each triad.

① _____ ② _____ ③ _____ ④ _____ ⑤ _____




⑥ _____ ⑦ _____ ⑧ _____ ⑨ _____ ⑩ _____




PART 2

Spell the triad indicated by each lead sheet symbol.

⑪ B \flat ⑫ F \sharp m ⑬ D \flat ⁺ ⑭ A ⑮ C m



⑯ F \sharp ^o ⑰ E⁺ ⑱ B ⑲ F ⑳ E \flat ^o



Lead Sheet Symbols

PART 3

Write the lead sheet symbol for each seventh chord.

21 _____ 22 _____ 23 _____ 24 _____ 25 _____

26 _____ 27 _____ 28 _____ 29 _____ 30 _____

Detailed description: This section contains two rows of musical staves. Each staff has five measures, each containing a chord diagram. Above each measure is a circled number (21-30) and a blank line for the student to write the lead sheet symbol. The chord diagrams are: 21: C major 7 (C-E-G-B); 22: D major 7 (D-F-A-C); 23: E major 7 (E-G-B-D); 24: F major 7 (F-A-C-E); 25: G major 7 (G-B-D-F); 26: A major 7 (A-C-E-G); 27: B major 7 (B-D-F-A); 28: C major 7 (C-E-G-B); 29: D major 7 (D-F-A-C); 30: E major 7 (E-G-B-D).

PART 4

Spell the seventh chord indicated by each lead sheet symbol.

31 D \emptyset 7 32 B7 33 Em7 34 G $^{\circ}$ 7 35 A maj7

36 G \sharp m7 37 C \sharp 7 38 B $^{\circ}$ 7 39 F maj7 40 Eb7

Detailed description: This section contains two rows of musical staves. Each staff has five empty measures for the student to write the chord spelling. Above each measure is a circled number (31-40) and a lead sheet symbol. The symbols are: 31: D \emptyset 7; 32: B7; 33: Em7; 34: G $^{\circ}$ 7; 35: A maj7; 36: G \sharp m7; 37: C \sharp 7; 38: B $^{\circ}$ 7; 39: F maj7; 40: Eb7.

Lead Sheet Symbols

PART 5

Write the lead sheet symbol for each triad or seventh chord.

41 _____ 42 _____ 43 _____ 44 _____ 45 _____

46 _____ 47 _____ 48 _____ 49 _____ 50 _____