

Rhythmic Notation: Compound

Name: _____


Re-notate the following excerpts with correct rhythmic notation.

①



Musical notation for exercise 1, consisting of two staves (treble and bass clefs) in 6/8 time. The notation is as follows:

Staff	Measure 1	Measure 2	Measure 3	Measure 4
Treble	Quarter, Quarter, Quarter, Quarter, Quarter, Quarter	Quarter, Quarter, Quarter, Quarter, Quarter, Quarter	Quarter, Quarter, Quarter, Quarter, Quarter, Quarter	Quarter, Quarter, Quarter, Quarter, Quarter, Quarter
Bass	Quarter, Quarter, Quarter, Quarter, Quarter, Quarter	Quarter, Quarter, Quarter, Quarter, Quarter, Quarter	Quarter, Quarter, Quarter, Quarter, Quarter, Quarter	Quarter, Quarter, Quarter, Quarter, Quarter, Quarter



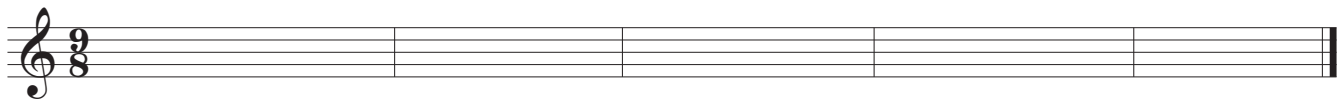
Blank musical notation for exercise 1, consisting of two staves (treble and bass clefs) in 6/8 time, intended for re-notation.

②



Musical notation for exercise 2, consisting of a single staff in treble clef in 9/8 time. The notation is as follows:

Measure	Notes
1	Quarter, Quarter, Quarter, Quarter, Quarter, Quarter, Quarter, Quarter, Quarter
2	Quarter, Quarter, Quarter, Quarter, Quarter, Quarter, Quarter, Quarter, Quarter
3	Quarter, Quarter, Quarter, Quarter, Quarter, Quarter, Quarter, Quarter, Quarter
4	Quarter, Quarter, Quarter, Quarter, Quarter, Quarter, Quarter, Quarter, Quarter
5	Quarter, Quarter, Quarter, Quarter, Quarter, Quarter, Quarter, Quarter, Quarter



Blank musical notation for exercise 2, consisting of a single staff in treble clef in 9/8 time, intended for re-notation.

Rhythmic Notation: Compound

3

