


# Practice Exercises #3b: Intervals

Name: \_\_\_\_\_


I. Identify the following intervals by both quality ( ° , m, M, P, or + ) and quantity (1, 2, 3, 4, 5, 6, 7, or 8).

1. 2. 3. 4. 5.



Interval: \_\_\_\_\_


6. 7. 8. 9. 10.



Interval: \_\_\_\_\_


II. Add the correct note *above* the given note, to form the interval specified.

1. 2. 3. 4. 5.



Interval: m2 M6 P4 M3 +4


6. 7. 8. 9. 10.



Interval: P5 m7 °3 m6 +8


III. Add the correct note *below* the given note, to form the interval specified.

1. 2. 3. 4. 5.



Interval: m6 m2 P5 P8 m7

6. 7. 8. 9. 10.



Interval: M3 M7 +4 M6 M2

