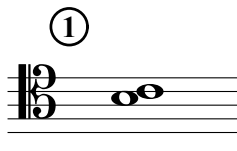



Intervals B

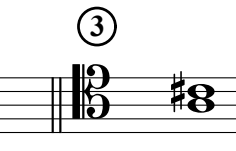
Name: _____


PART 1


Identify the following intervals by both quality (o, m, M, P, or +) and quantity (1, 2, 3, 4, 5, 6, 7, or 8).


①  _____


②  _____


③  _____


④  _____


⑤  _____

⑥  _____

⑦  _____

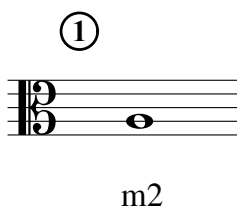
⑧  _____


⑨  _____

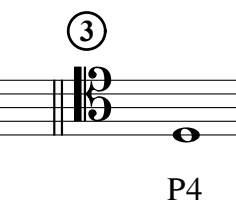
⑩  _____


PART 2


Add the correct note above the given note, to form the interval specified.


①  m2


②  M6

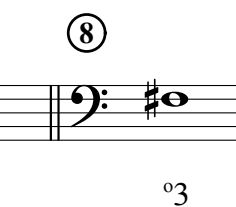
③  P4


④  M3


⑤  +4

⑥  P5

⑦  m7


⑧  °3

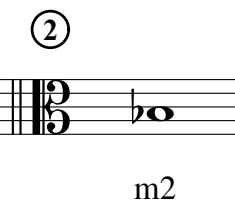
⑨  m6


⑩  +8


PART 3


Add the correct note below the given note, to form the interval specified.


①  m6


②  m2

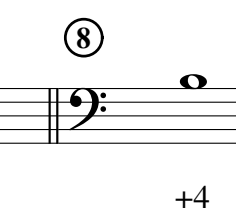
③  P5

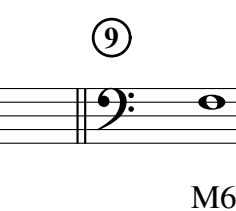
④  P8


⑤  m7

⑥  M3

⑦  M7

⑧  +4

⑨  M6

⑩  M2