



Seventh Chords A


Name: _____


PART 1


Identify the root note (A, D[#], etc.) and quality of each chord.


①  _____


②  _____


③  _____

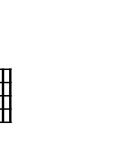
④  _____

⑤  _____

⑥  _____

⑦  _____


⑧  _____

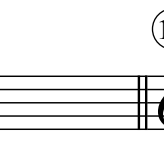
⑨  _____


⑩ _____


PART 2


Write the specified chords in root position.


⑪  B^{b7}


⑫  DM⁷


⑬  G^{#o7}

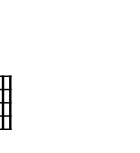
⑭  Cm⁷

⑮  B^{o7}

⑯  E^bM⁷

⑰  A^{o7}

⑱  Fm⁷

⑲  A^{b7}

⑳ D^bo⁷