


Intervals 4

Name: _____

PART 1: Identification

Identify the following intervals by both quality (d, mi, ma, P, or A) and size (U, 2, 3, 4, 5, 6, 7, or 8).

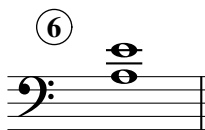
① 

② 


③ 


④ 


⑤ 


⑥ 

⑦ 


⑧ 

⑨ 

⑩ 


⑪ 

⑫ 

⑬ 

⑭ 

⑮ 

⑯ 

⑰ 

⑱ 


⑲ 


⑳ 


Intervals 4

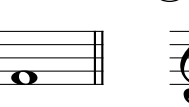
PART 2: Writing intervals


- Write the requested interval above or below the given note.
- Pay attention to the clef and the requested direction (up or down)!


21  ↑P5


22  ↑ma7

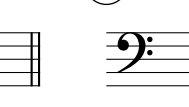
23  ↑mi3

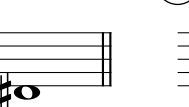
24  ↑P8


25  ↑mi6


26  ↑ma2


27  ↑A5


28  ↑dim7

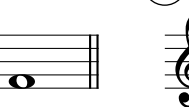
29  ↑ma3


30  ↑P4


31  ↓ma3


32  ↓d8


33  ↓ma2

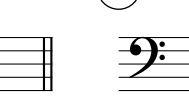
34  ↓ma7


35  ↓mi6

36  ↓mi7

37  ↓A4

38  ↓ma6

39  ↓P5

40  ↓mi2