


# Key Signatures: Major

Name: \_\_\_\_\_

## PART 1: Identification


Identify the following major key signatures.

①                      ②                      ③                      ④                      ⑤                      ⑥



\_\_\_\_\_

⑦                      ⑧                      ⑨                      ⑩                      ⑪                      ⑫

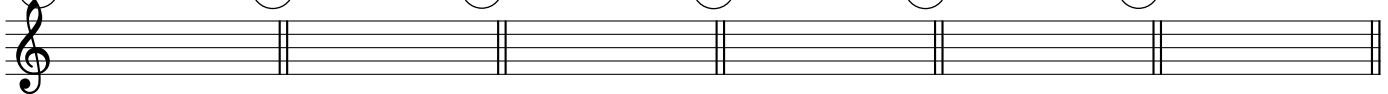


\_\_\_\_\_

## PART 2: Notation

Write the following major key signatures, using correct order and octave placement of accidentals.

⑬ B major      ⑭ E $\flat$  major      ⑮ G major      ⑯ A major      ⑰ D major      ⑱ F major



⑲ C major      ⑳ B $\flat$  major      ㉑ F $\sharp$  major      ㉒ A $\flat$  major      ㉓ E major      ㉔ G $\flat$  major

