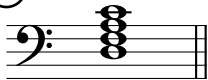








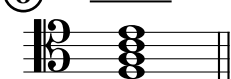


# Seventh Chords B

Name: \_\_\_\_\_

## PART 1





Write the chord symbol for each chord. The first exercise is completed for you as an example.

①  $D_{mi}^7$   ②  ③  ④  ⑤ 

⑥  ⑦  ⑧  ⑨  ⑩ 

## PART 2

Write the specified chords in root position. The first exercise is completed for you as an example.

⑪  $B^7$   ⑫  $A^{o7}$   ⑬  $D^7$   ⑭  $A^b_{ma}{}^7$   ⑮  $E_{mi}{}^7$  

⑯  $G^{\circ 7}$   ⑰  $C_{mi}{}^7$   ⑱  $B^b_{ma}{}^7$   ⑲  $C^{\# \circ 7}$   ⑳  $F^{o7}$  