



Seventh Chords C


Name: _____


PART 1


Write the chord symbol for each chord. The first exercise is completed for you as an example.


① **A⁷** 


② 


③ 


④ 


⑤ 

⑥ 

⑦ 


⑧ 


⑨ 


⑩ 


PART 2

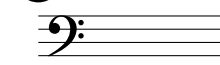
Write the specified chords in root position. The first exercise is completed for you as an example.


⑪ **D[#]°7** 


⑫ **C_{MA}7** 


⑬ **G[#]7** 


⑭ **E^b°7** 

⑮ **B°7** 

⑯ **B_{mi}7** 

⑰ **F7** 

⑱ **F_{MA}7** 

⑲ **A^b_{mi}7** 

⑳ **C[#]°7** 