

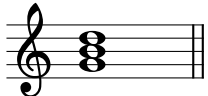
# Triads A


Name: \_\_\_\_\_


## PART 1: Chord symbols


Above the staff, write the chord symbol for each given triad.


The first has been completed for you as an example.

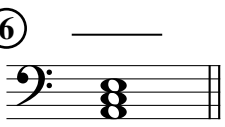
① **G** 


② 


③ 


④ 


⑤ 

⑥ 

⑦ 

⑧ 


⑨ 


⑩ 


## PART 2: Spelling triads


On the staff, notate the specified chords in root position.


The first exercise has been completed for you as an example.


⑪ **B $\flat$ <sup>+</sup>** 


⑫ **D** 


⑬ **G $\sharp$ <sup>o</sup>** 


⑭ **C<sub>m</sub>** 

⑮ **B<sup>o</sup>** 

⑯ **E $\flat$ <sup>+</sup>** 

⑰ **A<sup>o</sup>** 

⑱ **F<sub>m</sub>** 

⑲ **A $\flat$ <sup>+</sup>** 

⑳ **D $\flat$ <sup>o</sup>** 