

Triads B

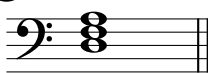
Name: _____

PART 1: Chord symbols


Above the staff, write the chord symbol for each given triad.

The first has been completed for you as an example.


① **G**




②




③




④




⑤



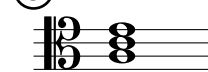
⑥




⑦




⑧



⑨



⑩




PART 2: Spelling triads


On the staff, notate the specified chords in root position.

The first exercise has been completed for you as an example.


⑪ **B**




⑫ **A°**




⑬ **D_m**




⑭ **A^{b+}**




⑮ **E_m**




⑯ **G°**



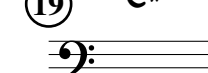
⑰ **C_m**



⑱ **B^{b+}**



⑲ **C#**



⑳ **F°**

