

Triads C


Name: _____

PART 1: Chord symbols


Above the staff, write the chord symbol for each given triad.

The first has been completed for you as an example.


① **A**




②




③




④




⑤




⑥




⑦




⑧



⑨



⑩




PART 2: Spelling triads


On the staff, notate the specified chords in root position.

The first exercise has been completed for you as an example.


⑪ **B**




⑫ **C+**



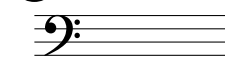
⑬ **G#**




⑭ **Ebm**




⑮ **B°**




⑯ **B+**




⑰ **Fm**



⑱ **F#m**



⑲ **Ab°**



⑳ **D**

