


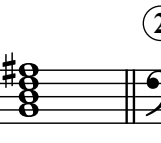
Seventh Chords A


Name: _____


PART 1


Identify the root note (A, D[#], etc.) and quality of each chord.


①  _____


②  _____

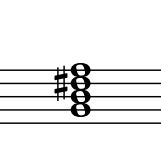
③  _____

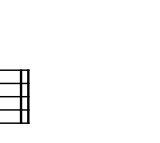
④  _____


⑤  _____

⑥  _____

⑦  _____


⑧  _____


⑨  _____


⑩  _____


PART 2


Write the specified chords in root position.

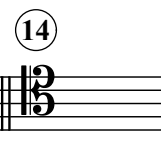
⑪  B^{b7}


⑫  D^{M7}


⑬  G^{#o7}

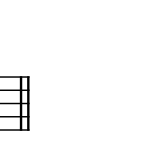
⑭  C^{m7}


⑮  B^{o7}

⑯  E^{bM7}

⑰  A^{o7}

⑱  F^{m7}

⑲  A^{b7}

⑳  D^{b o7}