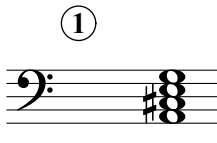


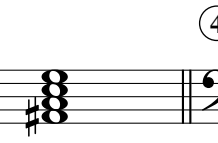



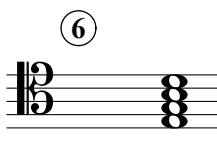




Seventh Chords C

Name: _____

PART 1

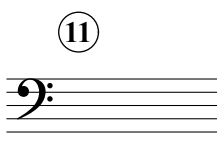




Identify the root note (A, D#, etc.) and quality of each chord.

①  || ②  || ③  || ④  || ⑤ 




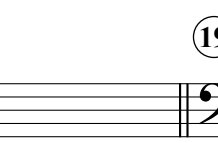

⑥  || ⑦  || ⑧  || ⑨  || ⑩ 

PART 2

Write the specified chords in root position.

⑪  || ⑫  || ⑬  || ⑭  || ⑮ 

D[#]7 C^M7 G[#]7 E^b7 B⁰7

⑯  || ⑰  || ⑱  || ⑲  || ⑳ 

B^m7 F⁷ F[#]M⁷ A^b m⁷ C[#]o⁷