



Triads A


Name: _____


PART 1


Identify the root note (A, D[#], etc.) and quality (° , m , +) of each chord.


①  _____


②  _____

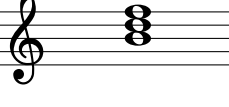
③  _____


④  _____


⑤  _____

⑥  _____

⑦  _____


⑧  _____


⑨  _____


⑩  _____


PART 2


Write the specified chords in root position.


⑪  B^{b+}


⑫  D


⑬  G^{#°}


⑭  Cm


⑮  B[°]

⑯  E^{b+}

⑰  A[°]

⑱  Fm

⑲  A^{b+}

⑳  D^{b°}