



Triads C


Name: _____


PART 1


Identify the root note (A, D#, etc.) and quality (°, m, M, +) of each chord.


①  _____


②  _____


③  _____


④  _____


⑤  _____

⑥  _____

⑦  _____


⑧  _____


⑨  _____


⑩  _____


PART 2


Write the specified chords in root position.


⑪  D[°]

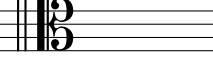
⑫  C⁺


⑬  G[#]


⑭  E^b m


⑮  B[°]

⑯  B⁺

⑰  F m

⑱  F[#] m

⑲  A^b °

⑳  G[#]