

Note Identification and Writing

Name: _____

PART 1

Identify the following notes by letter name only (A, B, C, etc.)

① ② ③ ④ ⑤ ⑥ ⑦ ⑧ ⑨ ⑩

Detailed description: A single musical staff in treble clef. It contains ten measures, each with a circled number above it. The notes are: 1. G4, 2. A4, 3. B4, 4. C5, 5. B4, 6. A4, 7. G4, 8. F4, 9. E4, 10. D4.

⑪ ⑫ ⑬ ⑭ ⑮ ⑯ ⑰ ⑱ ⑲ ⑳

Detailed description: A single musical staff in bass clef. It contains ten measures, each with a circled number above it. The notes are: 1. D3, 2. E3, 3. F3, 4. G3, 5. A3, 6. B3, 7. C4, 8. D4, 9. E4, 10. F4.

㉑ ㉒ ㉓ ㉔ ㉕ ㉖ ㉗ ㉘ ㉙ ㉚

Detailed description: A single musical staff in alto clef (C-clef on the third line). It contains ten measures, each with a circled number above it. The notes are: 1. C4, 2. D4, 3. E4, 4. F4, 5. G4, 6. A4, 7. B4, 8. C5, 9. B4, 10. A4.

㉛ ㉜ ㉝ ㉞ ㉟ ㊱ ㊲ ㊳ ㊴ ㊵

Detailed description: A single musical staff in alto clef (C-clef on the third line). It contains ten measures, each with a circled number above it. The notes are: 1. G3, 2. F3, 3. E3, 4. D3, 5. C3, 6. B2, 7. A2, 8. G2, 9. F2, 10. E2.

Note Identification and Writing

PART 2

Identify the following notes by letter name only (A, B, C, etc.)

④① ④② ④③ ④④ ④⑤ ④⑥ ④⑦ ④⑧ ④⑨ ⑤⑩

⑤① ⑤② ⑤③ ⑤④ ⑤⑤ ⑤⑥ ⑤⑦ ⑤⑧ ⑤⑨ ⑥⑩

⑥① ⑥② ⑥③ ⑥④ ⑥⑤ ⑥⑥ ⑥⑦ ⑥⑧ ⑥⑨ ⑦⑩

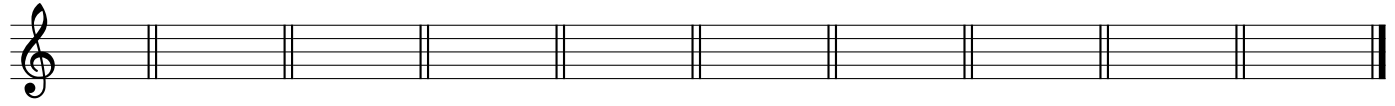
⑦① ⑦② ⑦③ ⑦④ ⑦⑤ ⑦⑥ ⑦⑦ ⑦⑧ ⑦⑨ ⑧⑩

Note Identification and Writing

PART 3

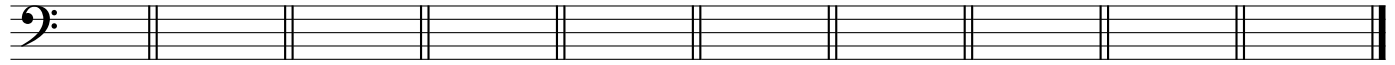
Draw the requested notes, using any octave.

81 82 83 84 85 86 87 88 89 90



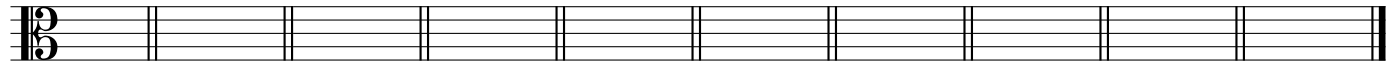
B E A D F G C A D F

91 92 93 94 95 96 97 98 99 100




A E C G B D F B G C

101 102 103 104 105 106 107 108 109 110



D G E B C F A E F D

111 112 113 114 115 116 117 118 119 120



B F G D E C A B G C