



Triads B


Name: _____


PART 1

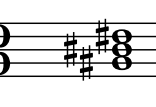
Identify the root note (A, D[#], etc.) and quality (° , m, M, +) of each chord.


①  _____


②  _____


③  _____


④  _____


⑤  _____

⑥  _____

⑦  _____


⑧  _____


⑨  _____


⑩  _____

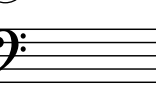
PART 2

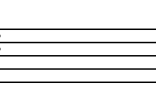
Write the specified chords in root position.


⑪  B


⑫  A[°]


⑬  Dm

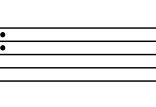
⑭  A^{b+}

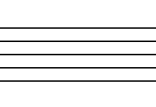
⑮  Em

⑯  G[°]

⑰  Cm

⑱  B^{b+}

⑲  C[#]

⑳  F[°]